

Wednesday Workout Maths



1) Write the numbers from 1 to 30. Are they written correctly?

2) Count in 2s, 5s and 10s from any number.

Count in 2s – Take it in turns to say the next number (in 2s).

Count in 5s tapping body parts starting from your head, shoulders, hips, knees, toes.

Count in 10s – Give your partner some tens (sliding hands together as if giving money)!

3) **Number bonds to 10** – For each number, write the number needed to make 10.

0 2 7 1
 5 6 10
9 3 4 8

4) **Number bonds to 20** - For each number, write the number needed to make 20

 3 14 17
8 19
 2 0
11 9 20
13 1 10

5) Know 1 more/1 less – Choose 5 numbers and think about what one more is and one less is for each one.

3

2

7

9

18

11

15

13

32

25

35

20

45

43

40

56

12

34

78

99

6) Days of the week

1. How many days are in a week?
2. What day comes after Wednesday?
3. What day comes before Friday?
4. If the day is Thursday, what day would it be in two days time?

Follow the link for a new days of the week song and dance:

https://www.youtube.com/watch?v=IPgTdgvi_jc&vl=en

7) Ordering numbers: Put these numbers in order starting from the smallest:

95 5 23 73 19 59 37

Tip: Think about how many tens and ones each number has.

8) Months of the year

1. How many months are there in a year?
2. What month comes after January?
3. What month comes before December?
4. If the month is January, what month would it be in two months time?

[Follow the link for the months of the year song:](#)

<https://www.youtube.com/watch?v=Fe9bnYRzFvk>

9) Odd and Even Numbers:

Even Steven is so great, he always ends in 0, 2, 4, 6 or 8

Odd Rod is fine, he always ends in 1, 3, 5, 7 or 9

Split these numbers up into odd and even numbers:

1 10 18 42 21

39 43 12 35 8

Problems of the Day 2020



1 Fill in the missing numbers.

10 less than 46 is

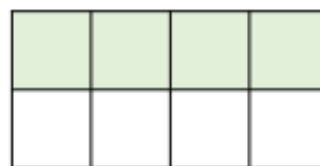
more than 30 is 35

2



How many sweets does Teddy have?

3 Lucy shades in part of a rectangle.



She shades some more squares.

$\frac{3}{4}$ of the rectangle is now shaded.

How many more squares did Lucy shade?

Problems Of The Day Answers!

Problems of the Day 2020


Day
1

- 1 Fill in the missing numbers.

10 less than 46 is

more than 30 is 35


2



How many sweets does Teddy have?

Teddy has 10 sweets.

- 3 Lucy shades in part of a rectangle.



She shades some more squares.

$\frac{3}{4}$ of the rectangle is now shaded.

How many more squares did Lucy shade?

Lucy shaded two more squares.

